

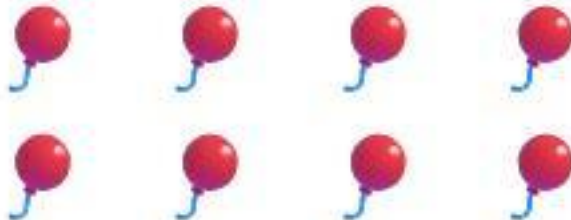







Kindergarten Math Assessment

Topic: Counting & Writing Numbers 0-20

Directions: Count the objects in each box. Write the correct number in the square.

<div data-bbox="493 486 817 561"></div> <div data-bbox="595 645 727 778"><input type="text"/></div>	<div data-bbox="1535 498 2103 556"></div> <div data-bbox="1756 645 1888 778"><input type="text"/></div>
<div data-bbox="443 874 872 1040"></div> <div data-bbox="595 1086 727 1219"><input type="text"/></div>	<div data-bbox="1530 874 2103 1040"></div> <div data-bbox="1756 1086 1888 1219"><input type="text"/></div>
<div data-bbox="309 1317 1006 1479"></div> <div data-bbox="595 1622 727 1756"><input type="text"/></div>	<div data-bbox="1530 1317 2103 1580"></div> <div data-bbox="1756 1622 1888 1756"><input type="text"/></div>
<div data-bbox="309 1857 1006 2119"></div> <div data-bbox="595 2260 727 2394"><input type="text"/></div>	<div data-bbox="1530 1857 2103 2220"></div> <div data-bbox="1756 2260 1888 2394"><input type="text"/></div>