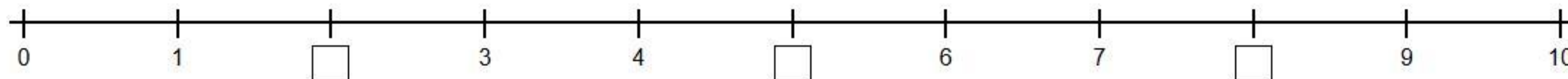


Name: _____

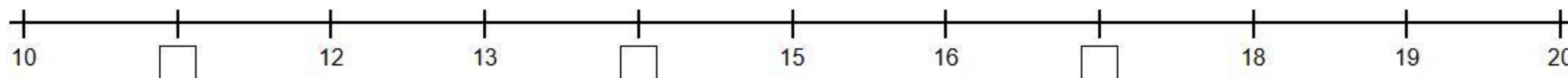
Date: _____


Number Line Practice 0 to 20

1.  Fill in the missing numbers on the number line (0 to 10).

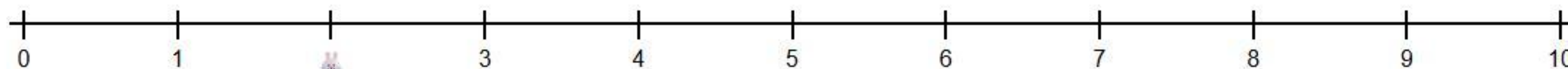


2.  Fill in the missing numbers on the number line (10 to 20).



3.  The bunny starts at 2 and hops 3 times. Where does it land?

Start at 2. Hop 3. $2 + 3 =$



4.  Look at the number line. Write the number that comes before and after.

Before 8

After 12

Before 19