

# Number Line Counting

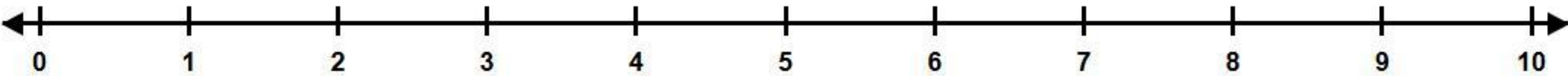
Name: \_\_\_\_\_

Date: \_\_\_\_\_

**Instructions:** Count the shapes and use the number line to help you solve the addition problems. Write the answer in the box.

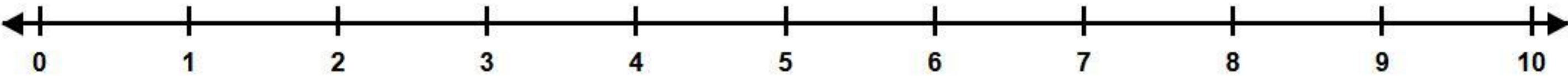
  +  =

2 + 1 =



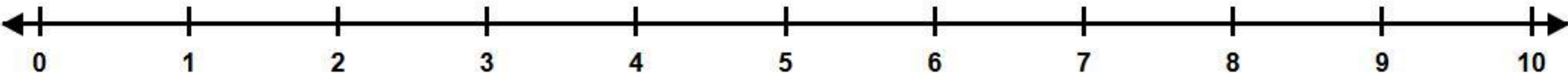
   +   =

3 + 2 =



 +     =

1 + 4 =



    +    =

4 + 3 =

