

Name: _____


Date: _____

Greater Than or Less Than?

Count the items. Write the symbol $>$ or $<$ in the circle.




3



1




2



4




5



3




1



6



4



2