



Name: \_\_\_\_\_


Date: \_\_\_\_\_

**SKIP COUNTING BY 10S**

Count the blocks by 10s. Find the dot on the graph for each group and draw a line to connect them!

 = 10

 = 20

 = 30

