


Name: \_\_\_\_\_

Date: \_\_\_\_\_

## SKIP COUNTING BY 5S



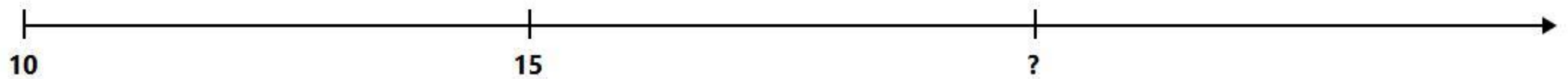
Look at the number line. Circle the number that comes next.



6 10 8




The frog jumps by 5s. What comes after 15?



20 16 18



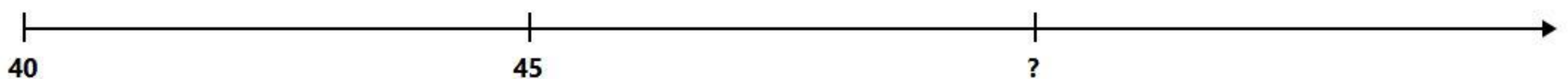
Help the kangaroo jump. Circle the next number.



31 34 35



Blast off by 5s! Which number is next?



50 46 55