


# Draw and Add Sets


Name: \_\_\_\_\_

Date: \_\_\_\_\_

*Instructions: Count the items in each box. Write the number on the line below. Draw the total number of items in the last box.*



+




=


\_\_\_\_\_

\_\_\_\_\_

\_\_\_\_\_



+




=


\_\_\_\_\_

\_\_\_\_\_

\_\_\_\_\_



+




=



\_\_\_\_\_

\_\_\_\_\_

\_\_\_\_\_



+



=

\_\_\_\_\_

\_\_\_\_\_

\_\_\_\_\_