

Name: _____

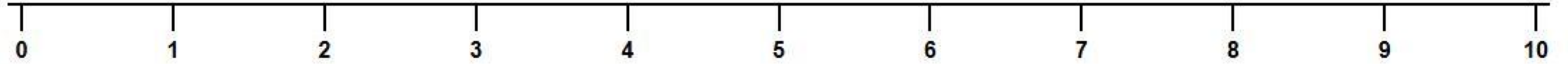
Date: _____

NUMBER LINE ADDITION

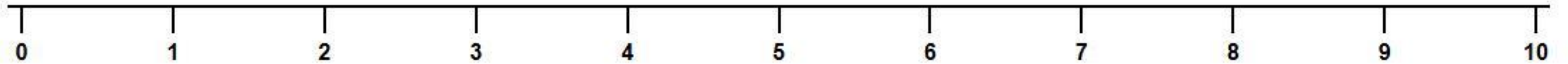
Help the animals jump to find the answer! Start at the first number and jump forward.



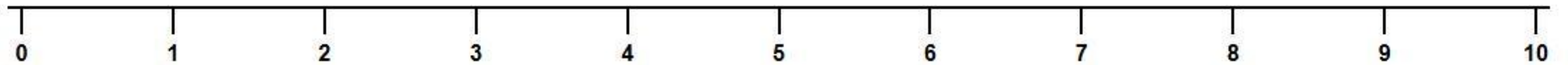
$3 + 4 =$



$5 + 2 =$



$2 + 6 =$



$1 + 8 =$

