


Domino Addition


Name: _____

Date: _____


Count the dots. Write the numbers in the boxes to find the sum.




$$\square + \square = \square$$




$$\square + \square = \square$$




$$\square + \square = \square$$



$$\square + \square = \square$$



$$\square + \square = \square$$



$$\square + \square = \square$$