

Addition with Number Lines

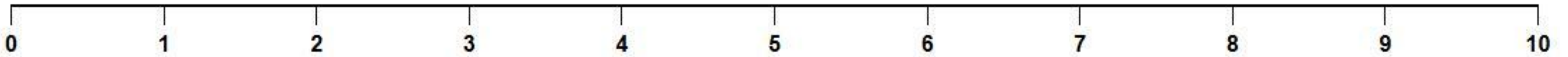
Count the pictures, use the number line to help you add, and write the answer in the box.

Name: _____

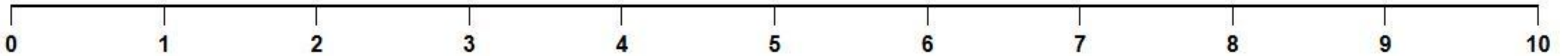
Date: _____



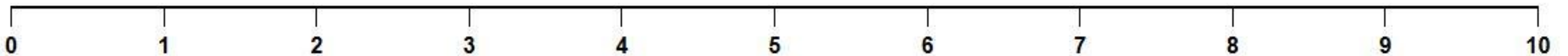
$$2 + 3 = \boxed{}$$



$$4 + 1 = \boxed{}$$



$$3 + 3 = \boxed{}$$



$$1 + 5 = \boxed{}$$

