

Subtraction Within 10

Name: _____

Date: _____


Instructions: Cross out the items in the ten frame to solve the subtraction problem.




$$7 - 3 = \square$$



$$5 - 2 = \square$$




$$10 - 4 = \square$$



$$8 - 5 = \square$$



$$6 - 3 = \square$$



$$9 - 2 = \square$$