

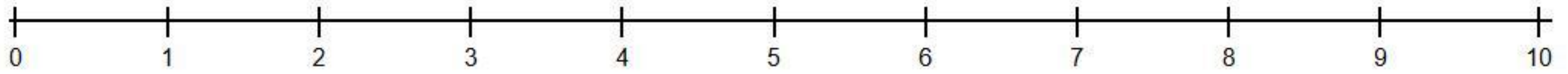
Name: \_\_\_\_\_

Date: \_\_\_\_\_

## SUBTRACTION WORD PROBLEMS

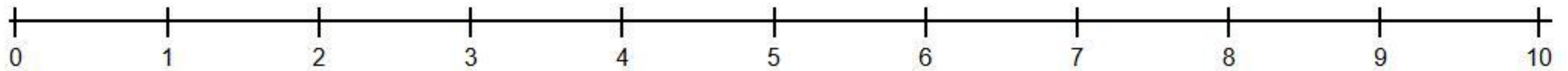
**Instructions:** Read the story. Use the number line to hop back and solve the problem. Write the equation.

1. There were 7 apples 🍏. A worm ate 3 of them. How many are left?



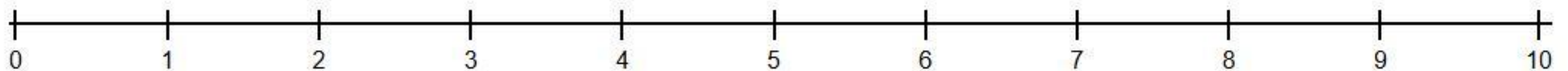
$$\square - \square = \square$$

2. You have 9 balloons 🎈. 4 balloons pop. How many are left?



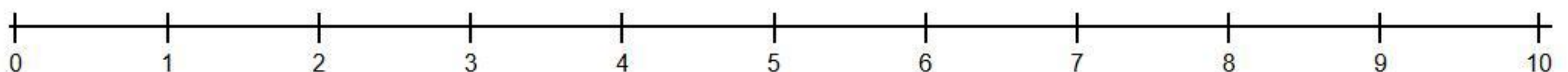
$$\square - \square = \square$$

3. There are 6 frogs 🐸. 2 jump into the water. How many are on the log?



$$\square - \square = \square$$

4. 10 stars ⭐ are in the sky. 5 hide behind a cloud. How many can you see?



$$\square - \square = \square$$