

# SCHOOL SUPPLY SUBTRACTION









Name: \_\_\_\_\_

Date: \_\_\_\_\_

Count the items, subtract, and write the answer in the box.

   -  =

    -   =

     -    =

  -  =

      -   =