

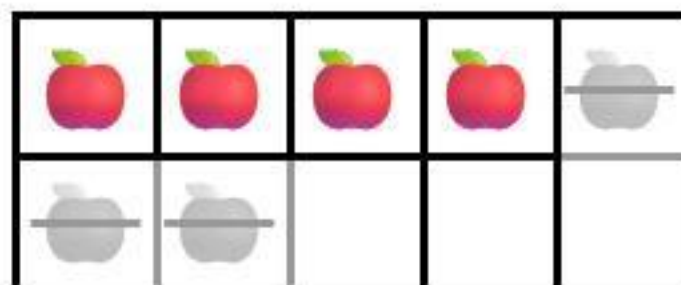
Name: _____

Date: _____

Subtraction with Ten Frames

Count the items, subtract the crossed-out ones, and write the answer.

$7 - 3 =$



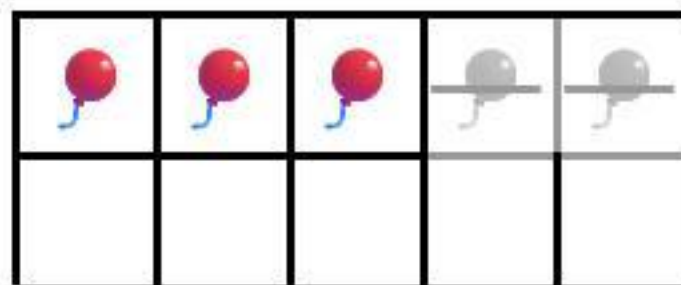
$= \square$

$10 - 4 =$




$= \square$

$5 - 2 =$



$= \square$

$8 - 5 =$



$= \square$

$6 - 1 =$



$= \square$