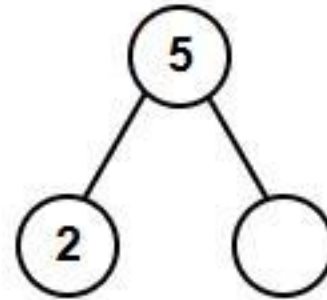


Name: \_\_\_\_\_

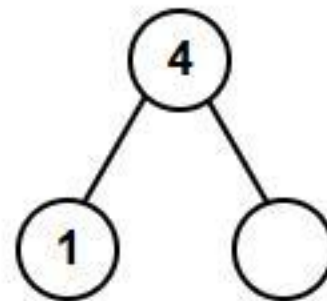
Date: \_\_\_\_\_

## NUMBER BOND SUBTRACTION

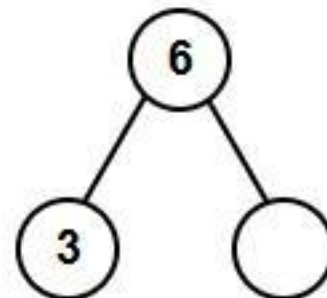

Count the items. Fill in the missing number bond part and complete the subtraction equation.



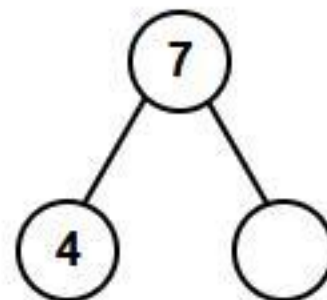
$$5 - 2 = \square$$



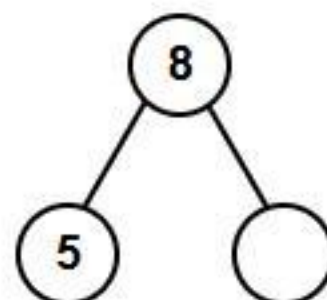
$$4 - 1 = \square$$



$$6 - 3 = \square$$



$$7 - 4 = \square$$



$$8 - 5 = \square$$