

SUBTRACTION WORD PROBLEMS


Use the ten frames to help you solve the problems.

Name: _____

Date: _____

Directions: Read the story. Cross out the pictures in the ten frame to subtract. Write the numbers to solve the equation.

There are **8** apples.
You eat **3** apples.
How many are left?




$$\square - \square = \square$$

There are **6** stars.
4 stars fall.
How many stay?




$$\square - \square = \square$$

You have **10** balloons.
5 balloons pop.
How many are left?



$$\square - \square = \square$$

There are **7** cookies.
Mom takes **2** cookies.
How many are left?



$$\square - \square = \square$$