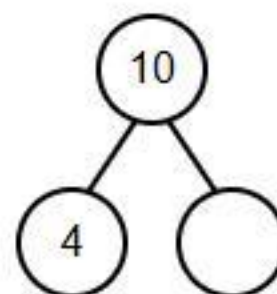


Name: _____

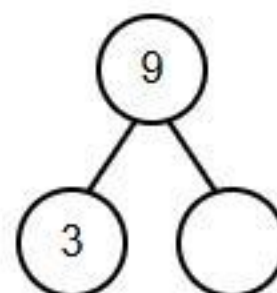
Date: _____

TEN FRAME SUBTRACTION

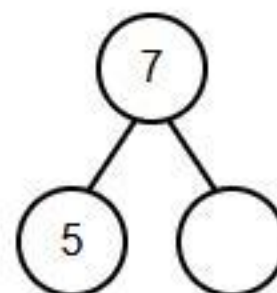
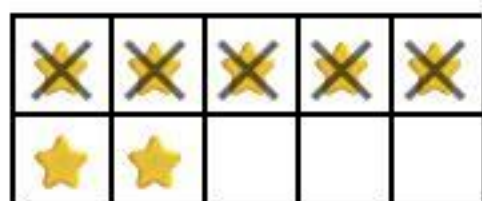
Look at the Ten Frame. Use the Number Bond and Equation to solve.



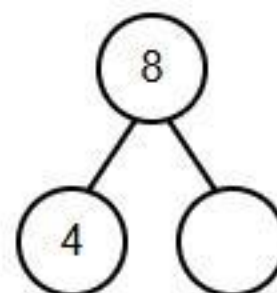
$$10 - 4 = \square$$



$$9 - 3 = \square$$



$$7 - 5 = \square$$



$$8 - 4 = \square$$