







Name: \_\_\_\_\_

Date: \_\_\_\_\_

# Math Worksheet: Polygons vs. Polyhedrons

**Instructions:** Look at the shape. Is it a **Polygon** (2D Flat) or a **Polyhedron** (3D Solid)? Color the circle in the correct box.

SHAPE	NAME	POLYGON (FLAT 2D)	POLYHEDRON (SOLID 3D)
	Triangle	<input type="radio"/>	<input type="radio"/>
	Cube	<input type="radio"/>	<input type="radio"/>
	Square	<input type="radio"/>	<input type="radio"/>
	Rectangular Prism	<input type="radio"/>	<input type="radio"/>
	Rhombus	<input type="radio"/>	<input type="radio"/>
	Pyramid	<input type="radio"/>	<input type="radio"/>

**Challenge:** Draw your own example of each below!

Draw a Polygon (2D)

Draw a Polyhedron (3D)