







# Geometric Attributes & Classification

Directions: Analyze each 2-dimensional figure below. Identify the technical attributes by counting the number of straight sides and vertices (corners). Record your data in the chart.

Vocabulary Bank:	Vertex / Vertices	Side	Parallel	Curved
------------------	-------------------	------	----------	--------

SHAPE NAME	FIGURE	COUNT OF SIDES	COUNT OF VERTICES
CIRCLE		<div></div>	<div></div>
TRIANGLE		<div></div>	<div></div>
SQUARE		<div></div>	<div></div>
RECTANGLE		<div></div>	<div></div>
RHOMBUS		<div></div>	<div></div>
HEXAGON		<div></div>	<div></div>