







Name: _____

Date: _____

Surface Area & Volume Calculation

Mathematics Worksheet • Level: Kindergarten

Instructions: Look at the block shapes below. Count the cubes to find the Volume. Count the square faces to find the Surface Area.

<div></div> <div>Volume: <input type="text"/></div> <div>Surface Area: <input type="text"/></div>	<div></div> <div>Volume: <input type="text"/></div> <div>Surface Area: <input type="text"/></div>
<div></div> <div>Volume: <input type="text"/></div> <div>Surface Area: <input type="text"/></div>	<div></div> <div>Volume: <input type="text"/></div> <div>Surface Area: <input type="text"/></div>
<div></div> <div>Volume: <input type="text"/></div> <div>Surface Area: <input type="text"/></div>	<div></div> <div>Volume: <input type="text"/></div> <div>Surface Area: <input type="text"/></div>

Score: