
















SHAPE ATTRIBUTES

Name: _____

Date: _____

Look at each shape. Count the **sides** (edges) and **corners** (vertices). Write the number in the box.

SHAPE	COUNT THE SIDES (EDGES)	COUNT THE CORNERS (VERTICES)
<div> Triangle</div>	<div></div>	<div></div>
<div> Square</div>	<div></div>	<div></div>
<div> Circle</div>	<div></div>	<div></div>
<div> Diamond</div>	<div></div>	<div></div>
<div> Hexagon</div>	<div></div>	<div></div>