







Name: _____

Date: _____

Estimate and Measure

Directions: Look at the object. Guess how many blocks long it is. Then, use your blocks to measure the real length.

Object	Estimate (My Guess)	Measure (Real Length)
 Pencil	<div></div> blocks	<div></div> blocks
 Crayon	<div></div> blocks	<div></div> blocks
 Caterpillar	<div></div> blocks	<div></div> blocks
 Key	<div></div> blocks	<div></div> blocks
 Spoon	<div></div> blocks	<div></div> blocks
 Glasses	<div></div> blocks	<div></div> blocks