



LENGTH & ESTIMATION

Part 1: Which is Longer?


1. Look at the animals. The **Snake** is 5 blocks long. The **Turtle** is 2 blocks long. Check the box for the longer animal.



Snake (5)


Turtle (2)

- ☐ Snake 
- ☐ Turtle 

2. Compare the bus and the car. Which one is shorter? Circle the correct answer.




Bus


Car

The Bus

The Car

Part 2: Estimation

3. Look at the Train . Estimate how many blocks  long it is.





 (1 block)


Circle your best guess:

2 Blocks


5 Blocks

50 Blocks

4. A crayon  is about 3 paperclips  long.


How many paperclips long is a paintbrush  ?

 =   

 = _____ 


(Write a number)

Part 3: Draw It!

5. Draw a worm  that is **shorter** than the ruler.



Draw here

6. Draw a tree  that is **taller** than the house.



Draw here