

Name: _____

Date: _____

Weight Measurement: CVC Words


Directions: Count the blocks to find how much each object weighs. Write the number in the box.



cat



balances




blocks



pig



balances




blocks



hat



balances




blocks



box



balances




blocks



bug



balances



blocks