

PLACE VALUE: MORE AND LESS

Name: _____












Date: _____

Count the blocks. Write the numbers in the boxes.
Circle the side that has **MORE**.

Key:

= Ten (10)

= One (1)

BLOCKS A	NUMBER	COMPARISON	NUMBER	BLOCKS B
	<div></div>	← or →	<div></div>	
	<div></div>	← or →	<div></div>	
	<div></div>	← or →	<div></div>	
	<div></div>	← or →	<div></div>	
	<div></div>	← or →	<div></div>	
	<div></div>	← or →	<div></div>	