




Name: _____





Date: _____




Place Value & Comparison

Part 1: Count the blocks. Write the Tens and Ones. Write the total number.

COUNT TENS AND ONES						
	<table><tr><td>Tens</td></tr><tr><td>Ones</td></tr><tr><td>2</td></tr><tr><td>3</td></tr></table>	Tens	Ones	2	3	Total: <div></div>
Tens						
Ones						
2						
3						
	<table><tr><td>Tens</td></tr><tr><td>Ones</td></tr><tr><td></td></tr><tr><td></td></tr></table>	Tens	Ones			Total: <div></div>
Tens						
Ones						
	<table><tr><td>Tens</td></tr><tr><td>Ones</td></tr><tr><td></td></tr><tr><td></td></tr></table>	Tens	Ones			Total: <div></div>
Tens						
Ones						

Part 2: Compare the groups. Circle the correct answer.

WHICH HAS MORE?		
 4	VS	 2
 3	VS	 5

WHICH HAS LESS?		
 6	VS	 3
 2	VS	 7