



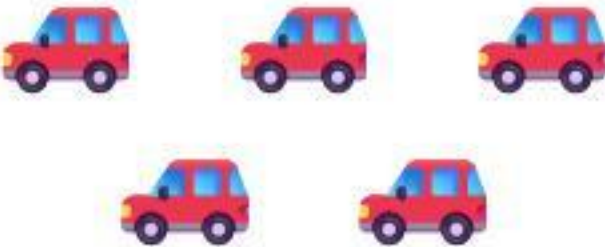







Name: _____

Date: _____

More or Less?

Directions: Read the question on the left. Look at the two groups of items. Circle the correct group or check the box underneath it.

WHICH GROUP HAS MORE?	<div> <input type="checkbox"/></div>	<div> <input type="checkbox"/></div>
WHICH GROUP HAS LESS?	<div> <input type="checkbox"/></div>	<div> <input type="checkbox"/></div>
WHICH GROUP HAS MORE?	<div> <input type="checkbox"/></div>	<div> <input type="checkbox"/></div>
WHICH GROUP HAS LESS?	<div> <input type="checkbox"/></div>	<div> <input type="checkbox"/></div>
WHICH GROUP HAS MORE?	<div> <input type="checkbox"/></div>	<div> <input type="checkbox"/></div>