




COUNTING COINS

Name: _____

Date: _____

Score: _____

Use the key below to count the total value of the coins in each row.

 = **1¢**  = **5¢**  = **10¢**



¢



¢



¢



¢



¢



¢