




Name: _____

Date: _____

PART 1: MATCH THE VALUE

Write the value of each coin in the box.

COIN NAME	PICTURE	VALUE (¢)
Penny		<input type="text"/>
Nickel		<input type="text"/>
Dime		<input type="text"/>
Quarter		<input type="text"/>

PART 2: ADD THE COINS

Count the coins and write the total.

1.  +  = ¢

2.  +  = ¢

3.  +  = ¢

4.  +  = ¢