



















Name: _____

Date: _____

Activity: Favorite Zoo Animals

Directions: Look at the pictograph below. Count the animals and answer the questions.

ANIMAL	COUNT
 Lion	  
 Elephant	    
 Monkey	 
 Giraffe	   

1. How many Lions are there?
2. How many Giraffes are there?
3. How many Elephants are there?
4. Which animal is the fewest? _____
5. Which animal is the most? _____
6. Count the Monkeys and Lions together: