





Name: _____

Date: _____


Weather Bar Graph

Look at the data below. Color the blocks in the graph to match the numbers.

 Sunny <div>5</div>	 Cloudy <div>3</div>	 Rainy <div>6</div>	 Stormy <div>2</div>
--	---	--	---

6				
5				
4				
3				
2				
1				
				

Weather Analysis

1. How many  days were there?
2. How many  days were there?
3. Which weather had the **most** days? _____
4. Which weather had the **fewest** days? _____
5. Add the Sunny  and Cloudy  days together:
- + =