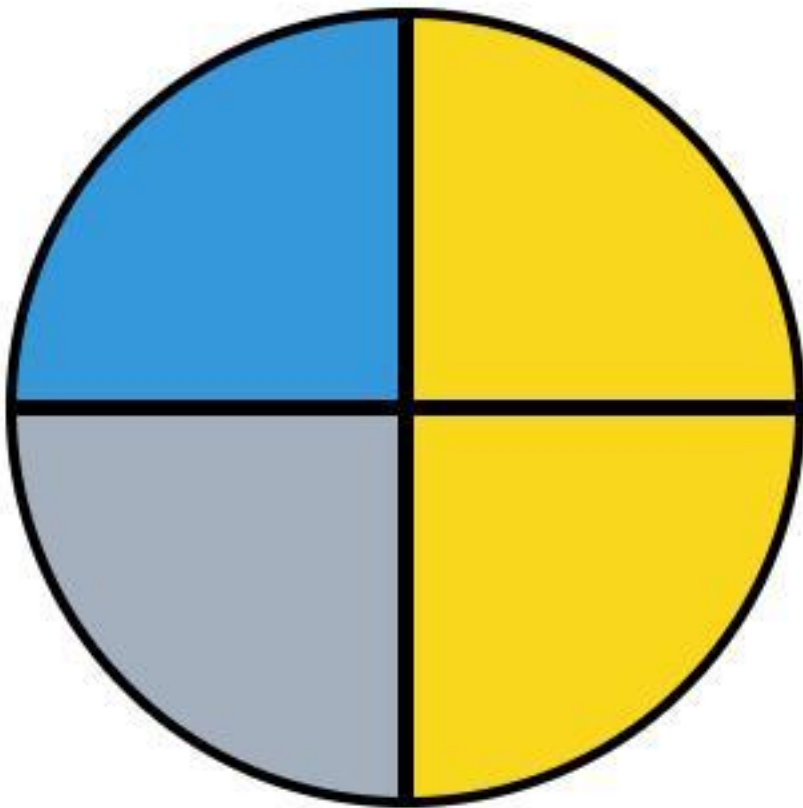








Name: \_\_\_\_\_

Date: \_\_\_\_\_

WEATHER PIE CHART



Look at the pie chart and answer the questions below.



-  Sunny 
-  Cloudy 
-  Rainy 


1. Which weather takes up the **most** space?

-  Sunny
-  Cloudy
-  Rainy

2. Is the Rainy part  equal to the Cloudy part  ?

- YES 
- NO 

3. Count the quarters (slices). How many are Sunny?

4. Draw what you wear when it is Rainy  :

Draw here