




Magnetic Attraction & Repulsion

Name: _____

Date: _____

Instructions: Look at the magnets in each row. Will they **Attract** (pull together) or **Repel** (push apart)? Circle the correct answer.


Tip: Opposites attract (N + S). Likes repel (N + N or S + S).



Attract




Repel



Attract





Repel



Attract



Repel



Attract



Repel