





Magnetic Force Worksheet

Name: _____

Date: _____

Instructions: Look at the poles (N and S).

Draw arrows (  or  ) in the dotted box to show if the magnets **Push** or **Pull**.

S N

Draw Arrows

S N

S N

Draw Arrows

N S

N S

Draw Arrows

S N

N S

Draw Arrows

N S