

Name: \_\_\_\_\_

Date: \_\_\_\_\_








MAP SCALE & DISTANCE

Part 1: Look at the Neighborhood Map.



SCALE: 1 Square ☐ = 1 Block

Part 2: Count the squares to find the answer.

- 1. The House  is \_\_\_\_\_ blocks away from the School .
- 2. The Police Car  is \_\_\_\_\_ blocks away from the Fire Truck .
- 3. The Tree  is \_\_\_\_\_ blocks away from the Fountain .
- 4. Draw a flower  in the empty square next to the House.