













Hanukkah Math

Counting & Quantitative Analysis

Name: _____







Date: _____

PART 1: COUNT THE SYMBOLS. CIRCLE THE CORRECT NUMBER.






  		2	3	4
    		4	5	6
   		3	4	5

PART 2: ANALYSIS - WHICH GROUP HAS MORE?

Look at the two boxes below. Check the box that has **more** items.

<p>Group A</p> <div></div> <div><input type="checkbox"/> Check here</div>	<p>Group B</p> <div></div> <div><input type="checkbox"/> Check here</div>
---	---

PART 3: COMPLETE THE PATTERN COUNT

     	<div><div>?</div><div>_____</div></div>	Draw the next group!
--	---	----------------------