

Name: _____

Date: _____

SOCIAL STUDIES: THEN AND NOW MAPS

1. Map Key: What do the symbols mean?

Look at the pictures. These are symbols for things on a map.



Forest



House



Water



Road

2. History Match: Draw a line

How did people travel **THEN** (Long ago) and **NOW** (Today)? Draw a line to match.

THEN



Horse



Dirt Path



NOW






Car



Paved Road



3. Draw Your Own Map

Draw a map of your street **NOW**. Use the symbols from the key (  ).

(Draw Here)